

Answer **all** the questions in the space provided.

For
Examiner's
Use

- 1 Iron and cobalt are adjacent elements in the Periodic Table. Iron has three main naturally occurring isotopes, cobalt has one.

(a) Explain the meaning of the term *isotope*.

.....

.....

..... [2]

- (b) The most common isotope of iron is ^{56}Fe ; the only naturally occurring isotope of cobalt is ^{59}Co .

Use the *Data Booklet* to complete the table below to show the atomic structure of ^{56}Fe and of ^{59}Co .

	number of		
isotope	protons	neutrons	electrons
^{56}Fe			
^{59}Co			

[3]

- (c) A sample of iron has the following isotopic composition by mass.

isotope mass	54	56	57
% by mass	5.84	91.68	2.17

(i) Define the term *relative atomic mass*.

.....

.....

.....

.....

- (ii) By using the data above, calculate the relative atomic mass of iron to **three** significant figures.

[5]

[Total: 10]

BLANK PAGE

- 2 Sulphur and its compounds are found in volcanoes, in organic matter and in minerals.

Sulphuric acid, an important industrial chemical, is manufactured from sulphur by the Contact process. There are three consecutive reactions in the Contact process which are essential.

For
Examiner's
Use

- (a) Write a balanced equation (using \rightleftharpoons where appropriate) for **each** of these reactions **in the correct sequence**.

1

2

3 [4]

- (b) What catalyst is used?

..... [1]

Hydrogen sulphide, H_2S , is a foul-smelling compound found in the gases from volcanoes. Hydrogen sulphide is covalent, melting at -85°C and boiling at -60°C .

- (c) (i) Draw a 'dot-and-cross' diagram to show the structure of the H_2S molecule.

- (ii) Predict the shape of the H_2S molecule.

.....

- (iii) Oxygen and sulphur are both in Group VI of the Periodic Table.

Suggest why the melting and boiling points of water, H_2O , are much higher than those of H_2S .

.....

.....

..... [4]

Hydrogen sulphide burns with a blue flame in an excess of oxygen to form sulphur dioxide and water.

For
Examiner's
Use

- (d) (i) Write a balanced equation for the complete combustion of H_2S .

.....

- (ii) What is the change in the oxidation number of sulphur in this reaction?

from to

- (iii) What volume of oxygen, measured at room temperature and pressure, is required for the complete combustion of 8.65 g of H_2S ? Give your answer to two decimal places.

[5]

Hydrogen sulphide is a weak diprotic (dibasic) acid. Its solution in water contains HS^- and a few S^{2-} ions.

- (e) (i) What is meant by the term *weak acid*?

.....

.....

- (ii) Write an equation, with state symbols, for the **first** ionisation of H_2S when it dissolves in water.

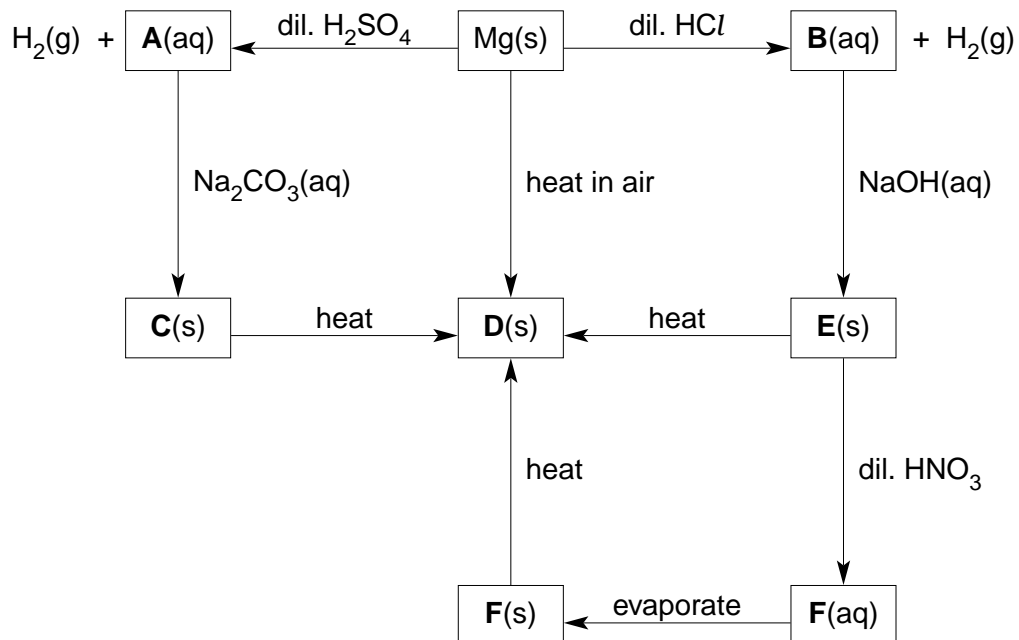
..... [3]

[Total: 17]

3 Magnesium is the eighth most common element in the Earth's crust.

The metal is widely used in alloys which are light and strong.

Some reactions of magnesium and its compounds are shown in the reaction scheme below.



(a) Identify, by name or formula, compounds **A** to **F**.

A

B

C

D

E

F

[6]

- (b) (i) Construct balanced equations for the following reactions.

magnesium to compound **A**

.....

compound **C** to compound **D**

.....

compound **F** to compound **D**

.....

- (ii) Suggest a balanced equation for the effect of heat on compound **E**.

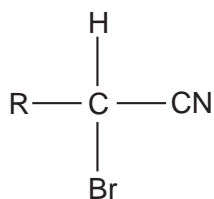
..... [4]

[Total: 10]

For
Examiner's
Use

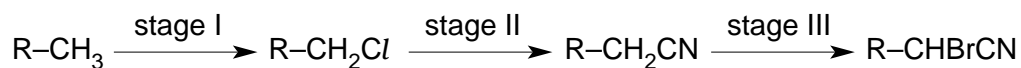
- 4 Compound **G**, in which R– represents the rest of the molecule, was made for use as a tear gas in World War 2.

For
Examiner's
Use



compound **G**

Compound **G** was made by the following sequence of reactions.



- (a) (i) For stage I **and** for stage II, state the reagent(s) and condition(s) used to carry out **each** change.

stage I reagent(s)

condition(s)

stage II reagent(s)

condition(s)

- (ii) Suggest the reagent(s) and condition(s) necessary to carry out stage III.

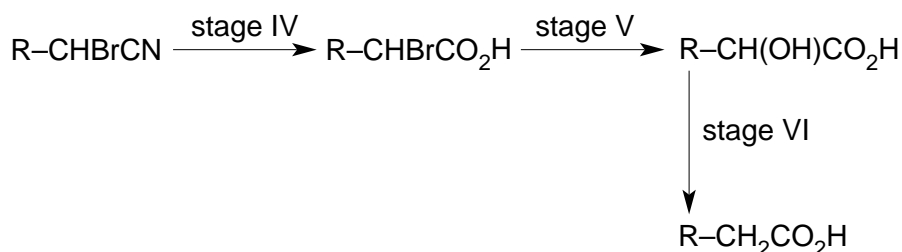
reagent(s)

condition(s)

[6]

Compound **G** was not actually used in World War 2 and stocks of it had to be destroyed safely. The following sequence of reactions was used in this process.

For
Examiner's
Use



- (b) For stage IV **and** for stage V state the reagent(s) and condition(s) necessary to bring about **each** reaction.

stage IV reagent(s)

condition(s)

stage V reagent(s)

condition(s) [4]

- (c) The full sequence of stages I to VI involves some compounds which contain chiral centres.

- (i) Explain what is meant by the term *chiral centre*.

.....

- (ii) Draw displayed formulae for the isomers of **one** compound in the full sequence of stages I to VI which you consider to be chiral.

[3]

[Total: 13]

- 5 A student obtained the following results when analysing an organic compound, **H**.

For
Examiner's
Use

test		observation
test 1	relative molecular mass	72
test 2	% composition by mass	C, 66.7%; H, 11.1%; O, 22.2%
test 3	reactions with Br ₂ (aq)	Br ₂ decolourised
test 4	reaction with Na(s)	H ₂ (g) evolved
test 5	reaction with warm Cr ₂ O ₇ ²⁻ /H ⁺	green colour observed

The student allowed test 5 to go to completion and then investigated the **product** of test 5 with the following result.

test 6	reaction with 2,4-dinitrophenylhydrazine	no reaction
--------	--	-------------

- (a) Calculate the molecular formula of **H**.

[2]

- (b) What can be deduced about the nature of **H** by the following tests?

(i) test 3

(ii) test 4

[2]

- (c) (i) What functional group would have given a positive result in test 6?

.....

- (ii) What functional group is shown to be present in **H** by tests 5 and 6?

.....

[2]

- (d) On testing a sample of **H**, the student found that it was not chiral.

H did, however, show *cis-trans* isomerism.

How does *cis-trans* isomerism arise in an organic molecule?

.....
.....
..... [2]

- (e) Use all of the information above to draw labelled, displayed formulae of the stereoisomers of compound **H**.

[2]

[Total: 10]

BLANK PAGE

Permission to reproduce items where third-party owned material protected by copyright is included has been sought and cleared where possible. Every reasonable effort has been made by the publisher (UCLES) to trace copyright holders, but if any items requiring clearance have unwittingly been included, the publisher will be pleased to make amends at the earliest possible opportunity.

University of Cambridge International Examinations is part of the University of Cambridge Local Examinations Syndicate (UCLES), which is itself a department of the University of Cambridge.